

# SBI CLERKS

## PREVIOUS PAPER – 2008

**HELD ON: 06-07-2008**

**BASED ON MEMORY**

### GENERAL AWARENESS

1. The Government of India recently decided to withdraw duty drawback benefits on iron and steel, cement and rice shipments. This decision is taken to meet which of the following objectives?  
A. To control inflation  
B. This was a long standing demand of the industry.  
C. This will help Government of India to maintain balance of payment as India is exporting more than what it imports.  
1) Only A                      2) Only B                      3) Only C                      4) Both A and B  
5) None of these
2. As per the latest figures published in the newspapers the growth of economy in India for the fiscal year ended March 2008 has been at which of the following levels? About .....
- 1) 6%                              2) 6.5%                              3) 7%                              4) 7.5%  
5) 9%
3. The name of B.S. Yeddyurappa was recently in news as he has taken over as the .....
- 1) Governor of Karnataka                              2) Chief Minister of Karnataka  
3) Governor of Andhra Pradesh                              4) Chief Minister of Andhra Pradesh  
5) None of these
4. The Government of India is planning to put up a bill in the Parliament to ensure free and compulsory education for all those who are of the age of .....
- 1) 3 years                              2) 5 years                              3) 6 - 14 years                              4) 12 - 20 years  
5) upto 21 years
5. "World No tobacco Day" is observed on which of the following days?  
1) 1<sup>st</sup> May                              2) 10<sup>th</sup> May                              3) 21<sup>st</sup> May                              4) 31<sup>st</sup> May  
5) 1<sup>st</sup> June
6. Late Vijay Tendulkar who died recently was a famous .....
- 1) social worker                              2) politician                              3) sportsman                              4) play wright  
5) None of these
7. Many times we read in newspapers about the GM Crops. What is the full form of 'GM'?  
1) Generally Marketed                              2) Genetically Modified  
3) Green and Moisturous                              4) Globally Marketed  
5) None of these

8. Barrack Obama whose name was in news recently is from which of the following countries?  
1) UK    2) USA    3) France    4) Italy  
5) None of these
9. Which of the following is an Oscar winning documentary on climate change in which former US Vice President Al Gore has featured as a narrator?  
1) An inconvenient Truth    2) The Sea  
3) Road to Prediction    4) Remember My Name  
5) None of these
10. Defence Ministers from 27 nations recently gathered at which of the following places to discuss security amongst the countries of Asia Pacific region?  
1) Beijing    2) New Delhi    3) Singapore    4) Kuala Lumpur  
5) None of these
11. Who amongst the following is NOT a lawn Tennis Player?  
1) Serena Williams    2) Katarina Srebotink  
3) Andy Murray    4) Nicolas Pietrangeli  
5) Ricky Ponting
12. The head office of the State Bank of India is located in .....
- 1) Kolkata    2) New Delhi    3) Pune    4) Ahmedabad  
5) None of these
13. Which of the following is NOT the name of the sensitive index of any global stock exchange?  
1) Nasdaq    2) Nikkei    3) Kospi    4) Dow  
5) Combix
14. Many times we read a term 'ECB' in financial newspapers. What is the full form of ECB?  
1) Essential Commercial Borrowing    2) Essential Credit and Borrowing  
3) External Credit and Business    4) External Commercial Borrowing  
5) None of these
15. Who amongst the following is the new face in Union Cabinet after it was reshuffled recently?  
1) Mani Shankar Aiyar    2) Rahul Gandhi  
3) Priyanka    4) Jyotiraditya Scindia  
5) None of these
16. Who amongst the following has taken over as the Chief Minister of Nagaland?  
1) Manik Sarkar    2) Dinesh Nandan Sahaya  
3) P. London    4) K. Shankaranarayanan  
5) None of these
17. Which of the following is the book written by Shobha De?  
1) Name Sake    2) My Life  
3) Speed Post    4) Long Walk To Freedom  
5) None of these

18. Before opening a new branch of a bank, banks are required to take mandatory permission or license from .....
- 1) State Government  
2) Reserve Bank of India  
3) Securities and Exchange Board of India  
4) Indian Bank Association  
5) None of these
19. At present State Bank of India has branch network of about .....
- 1) 8,000 Branches  
2) 9000 branches  
3) 10,000 branches  
4) 12,000 branches  
5) None of these
20. A group of students from Tibet recently was on a protest and staged dharna at some places in India. These Tibetans have some dispute with which of the following countries?
- 1) India  
2) Nepal  
3) Pakistan  
4) China  
5) Bhutan
21. Chinese Parliament is known as
- 1) National People's Congress  
2) National Assembly  
3) The National Parliament of China  
4) The House of Democracy of China  
5) None of these
22. The Upper HOuse of India Parliament is known as .....
- 1) The Lok Sabha  
2) The Rajya Sabha  
3) The National Assembly  
4) The Indian Parliament  
5) None of these
23. In the Supreme Court of India the number of judges including the Chief Justice is now .....
- 1) 20  
2) 21  
3) 25  
4) 28  
5) None of these
24. Which of the following is NOT a member of South Asian Association of Regional Cooperation (SAARC)?
- 1) Nepal  
2) Bhutan  
3) Myanmar  
4) Pakistan  
5) Bangladesh
25. Which of the following countries was under the grip of a severe earthquake recently in which several people lost their lives?
- 1) Bangladesh  
2) Bhutan  
3) Nepal  
4) China  
5) Sri Lanka
26. The Chairperson of the Lok Sabha is designated as .....
- 1) Chairman  
2) Speaker  
3) Vice President  
4) President  
5) None of these
27. Rahul Dravid completed his 10,000 runs in the Test Cricket while playing with which of the following teams recently?
- 1) Bangladesh  
2) pakistan  
3) Australia  
4) South Africa  
5) None of these

28. The "Agha Khan Cup" is associated with the game of .....
- 1) Football                      2) Badminton                      3) Hockey                      4) Cricket  
5) Tennis
29. The term 'checkmate' is associated with the game of .....
- 1) Chess                      2) Polo                      3) Swimming                      4) Wrestling  
5) Boxing
30. Which of the following awards is NOT associated with the area of sports?
- 1) Dhyanchand                      2) Arjun  
3) Dronacharya                      4) Saraswati Samman  
5) Kehl Ratna
31. "Oscar Awards" are given for the excellence in the field of .....
- 1) Films                      2) Literature                      3) Sports                      4) Politics  
5) Status
32. Which of the following is NOT a food crop?
- 1) Wheat                      2) Barley                      3) Maize                      4) Gram  
5) Cotton
33. Union Budget is always presented first in .....
- 1) The Lok Sabha                      2) The Rajya Sabha  
3) Joint Session of the Parliament                      4) Meeting of the Union Cabinet  
5) The State Assemblies
34. The first ever General Election took place in which of the following countries in Indian sub-continent?
- 1) Bhutan                      2) China                      3) Pakistan                      4) Bangladesh  
5) Sri lanka
35. The Government of India has earmarked about Rs.70,000 crore in Union Budget 2008 – 09 to help which of the following sections of society?
- 1) Children who are bounded labour                      2) Persons working in hazardous industries  
3) Farmers                      4) People living below poverty line  
5) None of these
36. Jose Louis has taken over as the Prime Minister of .....
- 1) France                      2) Argentina                      3) Spain                      4) New Zealand  
5) Italy
37. The Conference of Economic or Finance Ministers of ASIAN was held recently in .....
- 1) Jakata                      2) Bali                      3) New Delhi                      4) Tokyo  
5) Islamabad
38. Which of the following international forums or organisations has made a decision of not to go for reckless lending?
- 1) G-7                      2) G-8                      3) SAARC                      4) World Bank  
5) IMF

39. Mohmood Ahmadinejad who was in India on an official visit recently in the .....

- 1) Prime Minister of Iraq
- 2) President of Iran
- 3) Prime Minister of Iran
- 4) President of Iraq
- 5) None of these

40. India recently started "Maitree Express" to which of the following destinations?

- 1) Islamabad
- 2) Karachi
- 3) Dhaka
- 4) Kathmandu
- 5) None of these

### ENGLISH LANGUAGE

**Directions (41 – 50):** Read the following passage carefully and answer the questions given below it. Certain words have been printed in bold to help you locate them while answering some of the question.

There was a girl who sang beautifully at the temple every morning. The music master used to happily recall, "One day when I went into the woods to pluck flowers, I found this baby under a pipal tree". He picked her up carefully, raised her lovingly as if she were his daughter and taught her to sing before she spoke her first word.

The music master grew old and didn't see to well. The girl tended to him caringly. Many people including youngmen travelled from far and wide to hear her sing. This made the music master's heart quake with fear. "You will choose one of them as your husband. What is to become of me?" The girl replied, "I shall not be apart from you". But on a full moon night during the harvest festival, the master's chief disciple touched his feet reverently and said, "Master, grant me your permission for your daughter has agreed to marry me." The master's tears flowed freely "she has chosen well. Go and fetch her let me hear you sing the first of many melodies that you will sing together." The two began to sing in harmony. But the song was interrupted by the arrival of the royal messenger. "Your daughter is very fortunate the king has sent for her", the messenger said. At the palace the queen summoned the girl to her and said, "I place upon you the honour of making sure my daughter is never unhappy at her husband's home. "There wasn't a single tear in the girl's eyes but she thought of the master and her heart was heavy.

That very night the princess began her journey to Kambhoj. The princess's royal chariot led the procession and the girl's palanqum followed close behind carrying trunks of silk, jewellery and precious stones. it was covered with a velvet sheet and had soldiers on the both sides. As the procession passed, the master and his desciple Kumarsen stood still by wayside. A collective sigh escaped the crowd gathered there wishing that the princes wouldn't feel homesick in her faraway home.

41. Which of the following can be said about the girl?

- A. She was brought up by her father as her mother had died when she was a baby.
  - B. She was a talented singer who had learnt to sing at an early age.
  - C. She was only allowed to sing with the master's permission.
- 1) Only A
  - 2) Both A and B
  - 3) Only B
  - 4) All A, B and C
  - 5) None of these

42. What was the girl's reaction to leaving home?

- 1) She was honoured to be serving the princess.
- 2) Sadness at leaving the master.
- 3) She entrusted the task of looking after the music master to Kumarasen.
- 4) She was thrilled to be living in luxury.
- 5) None of these.

43. What task was entrusted to the girl by the queen.
- 1) Seeing that her daughter reached Kambhoj safely.
  - 2) Entertaining the princess on her journey to Kambhoj.
  - 3) Protecting the princess and reporting to the queen if she was unhappy.
  - 4) Entrusting the princess happiness.
  - 5) None of these.
44. What was the master's reaction to the girl's decision to marry his disciple?
- 1) He was upset and cried.
  - 2) He promised to give his permission if the couple sang well together.
  - 3) He was sad because she would be going to Kambhoj which was far away.
  - 4) He was pleased with her choice of husband.
  - 5) None of these.
45. Which of the following is not true in the context of the passage?
- A. She was going to her prospective husband's home to get engaged.  
B. Her parents wanted her to visit the kingdom of which she would be the future queen.  
C. To take expensive gifts for the rules of the Kambhoj who were well known to her parents.
- 1) Only A                      2) Both A and B                      3) All A, B and C                      4) Both A and C  
5) None of these
46. Why was the princess going on a journey?
- A. She was going to her prospective husband's home to get engaged.  
B. Her parents wanted her to visit the kingdom of which she would be the future queen.  
C. To take expensive gifts for the rules of the Kambhoj who were well known to her parents.
- 1) None                      2) Only B                      3) Only A                      4) Both A and B  
5) Both B and C
47. Why was the master afraid?
- 1) He felt the princess would treat the young girl unkindly.
  - 2) He would be all alone after the girl's marriage.
  - 3) The girl may not be able to adapt to her new home.
  - 4) He was slowly going blind.
  - 5) None of these.

**Directions (48 – 49): Choose the word which is most nearly the SAME in meaning to the word printed in bold as used in the passage.**

48. **Fortunate**

- 1) rich                      2) liked                      3) happy                      4) successfull  
5) luckily

49. **Raised**

- 1) nurtured                      2) lifted                      3) grew                      4) built  
5) high

50. Choose the word which is most **OPPOSITE** in meaning to the word collective as used in the passage.
- 1) alone                                      2) separately                                      3) united                                      4) partial
- 5) single

**Directions (51 – 55):** Read each sentence to find out if there is any error in it. The error, if any, will be in one part of the sentence. The number of that part is the answer. If there is no error the answer is (5). (Ignore errors of punctuation, if any.)

51. In present the (1)/ price of food grains (2)/ are high all (3)/ over the world. (4)/ No error (5)
52. Majority of the banks (1)/ today uses technology (2)/ to reach out to those (3)/ living in rural areas. (4) No error (5).
53. I will give (1)/ you the advance (2)/ if you repay it as (3)/ soon as possibly. (4)/ No error (5)
54. Though he is very (1)/ wealthy and powerful (2)/ he has any (3)/ concern for the poor. (4)/ No error (5)
55. Mala has the (1)/ ability to handle (2) many tasks at (3)/ the same time. (4)/ No error (5)

**Directions (56 – 60):** Which of the phrases 1, 2, 3 and 4 given below should replace the phrase given in bold in the following sentence to make the sentence grammatically meaningful and correct. If the sentence is correct as it is and 'No correction is required', mark 5 as the answer.

56. Finding himself in financial difficulty, he **came forward** me for help and advice.
- 1) come across                      2) is come upto                      3) came to                      4) come with
- 5) No correction required
57. Deepak **having been over** eighteen years of age, is entitled to vote.
- 1) has been of                      2) being over
- 3) who is having over                      4) who is been
- 5) No correction required.
58. The magazine **that we subscribed** to is published monthly.
- 1) which is subscribed                      2) we are subscribed
- 3) whom we subscribe                      4) whichever we subscribe
- 5) No correction required.
59. **Among of his** many good qualities, that I remember is his honesty.
- 1) All of his                      2) Some of the                      3) Only of his                      4) One of his
- 5) No correction required
60. Many of our clients **have deposit of** this foreign bank.
- 1) have deposits in                      2) had deposited                      3) with deposits                      4) have deposited
- 5) No correction required

**Directions (61 – 65):** Rearrange the following six sentences A, B, C, D, E and F in the proper sequence to form a meaningful paragraph; then answer the questions given below them.

- A. The sailor was told it was placed there as a warning signal to sailors to warn them of danger.
- B. he returned to the spot a few years latter as captain of his own ship.
- C. The ship was at sea for many days and finally anchored near the coastline.
- D. The night was stormy and without a warning signal his ship was wrecked on that very rock.

- E. One of the sailors on board saw a bell tied to a dangerous submerged rock.  
F. As a joke the sailor decided to steal the bell and hide it despite being informed of this.

61. Which of the following should be the **FIRST** sentence after rearrangement?  
1) A                                      2) B                                      3) C                                      4) D  
5) E
62. Which of the following should be the **SECOND** sentence after rearrangement?  
1) A                                      2) B                                      3) C                                      4) D  
5) E
63. Which of the following should be the **THIRD** sentence after rearrangement?  
1) A                                      2) B                                      3) C                                      4) D  
5) E
64. Which of the following should be the **FIFTH** sentence after rearrangement?  
1) A                                      2) B                                      3) C                                      4) D  
5) E
65. Which of the following should be the **SIXTH (LAST)** sentence after rearrangement?  
1) A                                      2) B                                      3) C                                      4) D  
5) E

**Directions (66 – 70):** In each question below a sentence with four words printed in bold type is given. These are numbered as 1, 2, 3 and 4. One of these four words printed in bold may be either wrongly spelt or inappropriate in the context of the sentence. Find out the word, which is wrongly spelt or inappropriate, if any. The number of the word is your answer. If all the words printed in bold are correctly spelt and also appropriate in the context of the sentence, mark 5 i.e. 'All correct' as your answer.

66. We have **incurred** (1)/ an **expense** (2)/ of over fifty **thousands** (3)/ this year **alone**. (4) All correct (5)
67. World Earth Day is **celebrated** (1)/ as a **means** (2)/ to make people **aware** (3)/ about the **environment**. (4)/ All correct (5).
68. The key **issue** (1)/ **discussed** (2)/ at the meeting was how to **resolve** (3)/ the food **crisis**. (4)/ All correct (5).
69. He **deserves** (1)/ some **recognition** (2)/ for working **diligently** (3)/ for the **passed** (4)/ five years. All correct (5)
70. There are many **employment** (1)/ **opportunities** (2)/ for fresh **graduates** (3)/ in the **market** (4)/ today. All correct. (5)

**Directions (71 – 80):** In the following passage there are blanks each of which has been numbered. These numbers are printed below the passage and against each five words are suggested one of which fits the blank appropriately. Find out the appropriate word in each case.

I had (71) to become a multipurpose manager. I took three steps to accomplish this. First, I took very (72) part in professional associations. I (73) the National president of the Indian Society for Training and Development one of the (74) organisations for HR professionals. This helped me to grow professionally. My communication skills (75). It also taught me (76) to conduct meetings in an effective manner. My job (77) me to different parts of the country and (78) believe that (79) provided me with an education. I also wrote a lot. Newspaper editors often approached me with (80) to write articles for their publications.



71. 1) achieved 2) aim 3) try 4) dreamed  
5) wanted
72. 1) selected 2) active 3) interesting 4) often  
5) joint
73. 1) elected 2) voted 3) became 4) applied  
5) decided
74. 1) respected 2) status 3) impressed 4) aged  
5) common
75. 1) lacked 2) grown 3) learnt 4) improved  
5) earned
76. 1) that 2) why 3) how 4) never  
5) anyhow
77. 1) aw 2) Showed 3) posted 4) discovered  
5) took
78. 1) quiet 2) firmly 3) strong 4) first  
5) not
79. 1) travelling 2) journey 3) visit 4) migrating  
5) shift
80. 1) wish 2) offer 3) appointment 4) requests  
5) commands

### QUANTITATIVE APTITUDE

*Directions (81 – 100):* What should come in place of the question mark (?) in the following questions.

81.  $\frac{15 \times 11 + 45}{13 \times 9 - 30} = ?$   
1)  $2\frac{1}{5}$  2)  $3\frac{1}{7}$  3)  $5\frac{3}{10}$  4)  $3\frac{8}{17}$   
5) None of these
82.  $39852 \div \sqrt{?} = 81 \times 12$   
1) 41 2) 1849 3) 1681 4) 43  
5) None of these
83.  $54679 + 34521 = ? + 43668$   
1) 45352 2) 45232 3) 42455 4) 45552  
5) None of these
84.  $44\% \text{ of } 766 + ? = 900$   
1) 498.48 2) 562.96 3) 574.80 4) 444.64  
5) None of these

85. 67% of (?) = 5287.64

- 1) 7080                      2) 6442                      3) 6938                      4) 6739  
5) None of these

86.  $\sqrt{17956} = ?$

- 1) 134                      2) 144                      3) 124                      4) 104  
5) None of these

87. 30% of 200 +  $\sqrt{?}$  = 48% of 550 - 10% of 150

- 1) 600                      2) 21                      3) 189                      4) 35721  
5) None of these

88.  $11.6 \times 8.9 \times 5.1 = ?$

- 1) 398.264                      2) 664.358                      3) 468.428                      4) 526.524  
5) None of these

89.  $2637 \div 36 = ?$

- 1) 73.25                      2) 68                      3) 66.5                      4) 71  
5) None of these

90.  $11160 \div 45 \div 8 = ?$

- 1) 29                      2) 31                      3) 43                      4) 47  
5) None of these

91.  $18 \times 8 + (?)^2 = (15)^2$

- 1) 9                      2) 81                      3) 18                      4) 27  
5) None of these

92. 66% of 546 - 43% of 439? =

- 1) 103.57                      2) 111.71                      3) 138.63                      4) 171.59  
5) None of these

93.  $975 + 714 \div 42 = ?$

- 1) 124                      2) 992                      3) 888                      4) 40  
5) None of these

94.  $(62)^2 + (14)^2 = (?)^2 + 559$

- 1) 56                      2) 48                      3) 59                      4) 53  
5) None of these

95.  $? \div 40 \times 9 = 378$

- 1) 1616                      2) 1648                      3) 1696                      4) 1680  
5) None of these

96.  $2\frac{1}{4} + 3\frac{3}{4} - 1\frac{2}{3} = ?$

- 1)  $4\frac{1}{3}$                       2)  $4\frac{1}{4}$                       3)  $4\frac{2}{3}$                       4)  $4\frac{3}{5}$   
5) None of these

97. 45% of 1200 = 54% of?  
1) 1080                      2) 1320                      3) 1240                      4) 720  
5) None of these
98.  $1354 + 1184 = ? \%$  of 5640  
1) 36                      2) 42                      3) 45                      4) 52  
5) None of these
99.  $5\frac{1}{8}$  of  $208 + 786 = 2000 - ?$   
1) 112                      2) 148                      3) 184                      4) 124  
5) None of these
100.  $546 + 222 \div 6 \times 9 = ?$   
1) 982                      2) 997                      3) 879                      4) 839  
5) None of these
101. The difference between 56% of a number and 41% of the same number is 660. What is 8% of that number?  
1) 321                      2) 336                      3) 345                      4) 358  
5) None of these
102. What should come in place of the question mark (?) in the following number series?  
1   5   17   53   161   485   ?  
1) 1168                      2) 1254                      3) 1457                      4) 1372  
5) None of these
103. The simple interest accrued on a amount of Rs.12,450 at the end of 6 years is Rs. 8,964. What is the rate of interest p.c.p.a.?  
1) 8                      2) 14                      3) 10                      4) 12  
5) None of these
104. A plot of 575 square feet is available at the rate of Rs.5,500 per square feet. If 25% of the total cost of the plot is to be paid for booking the plot, how much is the booking amount?  
1) Rs.825750                      2) Rs.790625  
3) Rs.875250                      4) Rs.735500  
5) None of these
105. If the product of two successive positive integers is 7482, which is the greater integer?  
1) 87                      2) 82                      3) 84                      4) 89  
5) None of these
106. Ms. Anisha deposits an amount of Rs.35000 to obtain a simple interest at the rate of 15 p.c.p.a. for 4 years. What total amount will Ms. Anisha get at the end of 4 years.  
1) Rs.56000                      2) Rs.60500  
3) Rs.52000                      4) Rs.48500  
5) None of these

107. What is the compound interest accrued on an amount of Rs.12000 at the rate of 9 p.c.p.a. at the end of 2 years.
- 1) Rs.2545                      2) Rs.2257.2                      3) Rs.2986                      4) Rs.2775.4
- 5) None of these
108. One – seventh of a number is 51. What will be 64% of that number?
- 1) 248.12                      2) 228.48                      3) 238.24                      4) 198.36
- 5) None of these
109. Of the two numbers, 48 per cent of first number is 60 per cent of the second number. What is the respective ratio of first number to the second number?
- 1) 4 : 7    2) 3 : 4
- 3) 5 : 4    4) Cannot be determined
- 5) None of these
110. What approximate value should come in place of the question mark (?) in the following question?  
 $45.709 \div 11.342 \times 6.667 = ?$
- 1) 88    2) 46    3) 112    4) 56
- 5) 27
111. The owner of a Television shop charges his customer 16% more than the cost price. If a customer paid Rs.16588 for a Television, then what was the cost price of the Television?
- 1) Rs. 14300                      2) Rs. 15500                      3) Rs. 13800                      4) Rs. 12000
- 5) None of these
112. The average age of a man and his son is 48 years. The ratio of their ages is 11 : 5 respectively. What will be ratio of their ages after 6 years?
- 1) 6 : 5    2) 5 : 3    3) 4 : 3    4) 2 : 1
- 5) None of these
113. The cost of 20 folders and 15 pens is Rs. 995. What is the cost of 12 folders and 9 pens?
- 1) Rs. 652    2) Rs. 597
- 3) Rs. 447    5) Cannot be determined
- 5) None of these
114. In a class of 30 students and 2 teachers, each student got sweets that are 20% of the total number of students and each teacher got sweets that are 30% of the total number of students. How many sweets were there?
- 1) 188    2) 180    3) 208    4) 178
- 5) None of these
115. If an amount of Rs.97836 is distributed equally amongst 31 children, how much amount would each child get?
- 1) Rs. 3756    2) Rs. 3556    3) Rs. 3356    3) Rs. 3156
- 4) None of these
116. If  $(58)^2$  is added to the square of a number the answer to obtained is 5668. What is the number?
- 1) 56    2) 33    3) 47    4) 51
- 5) None of these

117. In an examination it is required to get 380 of the aggregate marks to pass. A student gets 32% of marks and is declared failed by 76 marks. What are the maximum aggregate marks a student can get?
- 1) 945  
2) 975  
3) 950  
4) Cannot be determined  
5) None of these
118. Which number should replace both the question marks (?) in the following equation?
- $$\frac{?}{188} = \frac{47}{?}$$
- 1) 88  
2) 124  
3) 66  
4) 94  
5) None of these
119. A sum of money is divided among A, B, C and D in the ratio of 4 : 6 : 11 : 13 respectively. If the share of C is Rs.7854, then what is the total amount of money of B and D together?
- 1) Rs. 13,566  
2) Rs. 16,928  
3) Rs. 12,784  
4) Rs. 15,676  
5) None of these
120. A single person takes 8 minutes to type a page. If from 1.00 p.m. to 2.00 p.m., 1710 pages are to be typed, how many persons should be employed on this job?
- 1) 207  
2) 221  
3) 249  
4) 256  
5) None of these

### REASONING ABILITY

121. How many such pairs of letters are there in the word **BEHAVIOUR** each of which has as many letters between them in the word as in the English alphabet?
- 1) None  
2) One  
3) Two  
4) Three  
5) More than three
122. How many such digits are there in the number 764528 each of which is as far away from the beginning of the number as when the digits are arranged in descending order within the number?
- 1) None  
2) One  
3) Two  
4) Three  
5) More than three
123. What should come next in the letters series given below?  
A B A B C A B C D A B C D E A B C D E F A B C D E F G A B C
- 1) D  
2) E  
3) F  
4) H  
5) None of these
124. How many meaningful English words can be made with the letters E P R Y using each letter only once in each word?
- 1) None  
2) One  
3) Two  
4) Three  
5) More than three
125. J, D, L, H and F each travelling to station, each one reaches at a different time. L reaches only after J and D reaches only before F. Who amongst them is third to reach?
- 1) F  
2) L  
3) D  
4) Cannot be determined  
5) None of these

126. Four of the following five are alike in a certain way and so form a group. Which is the one that does not belong to that group?  
1) 21                      2) 35                      3) 42                      4) 56  
5) 49
127. In a certain code **ALIVE** is written as **WFHBM**. How is **VALUE** written in that code?  
1) VFMWB                      2) VFKWB                      3) WBAVF                      4) WBKVF  
5) None of these
128. The letters in the word **DANGEROUS** are changed in such a way that the consonants are replaced by the previous letter in the English alphabet and the vowels are replaced by the next letter in the English alphabet. Which of the following will be the third letter from the left end of the new set of letters?  
1) B                      2) M                      3) O                      4) I  
5) None of these
129. Four of the following five are alike in a certain way and so form a group. Which is the one that does not belong to that group?  
1) Table                      2) Desk                      3) Wardrobe                      4) computer  
5) Chair
130. Four of the following five are alike in a certain way and so form a group. Which is one that does not belong to that group?  
1) Orange                      2) Apple                      3) Guava                      4) Papaya  
5) Mango

**Directions (131 – 135):** In each of the question below are given three statements followed by two conclusions numbered I and II. You have to take the given statements to be true even if they seem to be a variance from commonly known facts. Read all the conclusions and then decide which of the given conclusions logically follows from the given statements disregarding commonly known facts.

Give answer 1 if only conclusion I follows.

Give answer 2 if only conclusion II follows.

Give answer 3 if either conclusion I or II follows.

Give answer 5 if both conclusions I and II follow.

131. **Statements:** Some doors are windows.

All windows are floors.

All floors are ceilings.

**Conclusions:** I. Some doors are floors.

II. All windows are ceilings.

132. **Statements:** Some computers are books.

Some books are pens.

All pens are notebooks.

**Conclusions:** I. Some books are notebooks.

II. Some notebooks are computers.

133. **Statements:** All fruits are flowers.

No flower is sweet.

Some sweets are deserts.

**Conclusions:** I. Some deserts are flowers.

II. No desert is flower.

134. **Statements:** All bottles are jars.

Some jars are bowls.

Some bowls are buckets.

**Conclusions:** I. Some bottles are bowls.

II. Some buckets are jars.

135. **Statements:** Some shoes are socks.

All socks are sandals.

All sandals are trousers.

**Conclusions:** I. All trousers are socks.

II. Some sandals are shoes.

**Directions (136 – 140):** Study the following arrangement carefully and answer the questions given below:

H T 7 L E \$ 2 Y # W 4 I F @ V 3 A 8 % K 1 M © 5 G U 6 C

136. Which of the following is the fifth to the left of the fourteenth from the left end of the above arrangement?

- 1) #                                  2) W                                  3) Y                                  4) K  
5) None of these

137. How many such vowels are there in the above arrangement, each of which is immediately preceded by a number but not immediately followed by a symbol?

- 1) None                                  2) One                                  3) Two                                  4) Three  
5) More than three

138. Four of the following five are alike in a certain way based on their positions in the above arrangement and so form a group. Which is the one that does not belong to that group?

- 1) H E 7                                  2) 2 4 #                                  3) K 5 M                                  4) 3 K 8  
5) F V A

139. How many such consonants are there in the above arrangement, each of which is immediately preceded by a number and also immediately followed by a symbol?

- 1) None                                  2) One                                  3) Two                                  4) Three  
5) More than three

140. What should come in place of the question mark (?) in the following series based on the above arrangement?

T 7 E Y # 4 @ V A ?

- 1) K M ©                                  2) % K M                                  3) % 1 M                                  4) K 1 ©  
5) None of these

**Directions (141 – 144):** Study the following information carefully and answer the questions given below:

M, D, J, Q, T, F, H and N are sitting around a circle facing at the centre. T is third to the right of F who is second to the left of M. Q is not a neighbour of T or F and is third to the left of H. J is second to the right of N.

141. Who is second to the left of H?  
 1) T                                      2) F                                      3) Q                                      4) Data inadequate  
 5) None of these
142. Who is to the immediate left of M?  
 1) H                                      2) T                                      3) Q                                      4) J  
 5) None of these
143. In which of the following pairs the second person is to be immediate left of the first person?  
 1) MT                                      2) NQ                                      3) HF                                      4) DN  
 5) None of these
144. What is Q's position with respect of M?  
 A. Fourth to the right B. Fourth to the left  
 C. Fifth to the left D. Fifth to the right  
 1) A Only                                      2) B Only                                      3) Either C or D                                      4) A and B Only  
 5) None of these
145. Find the Odd one?  
 1) 28                                      2) 125                                      3) 9261                                      4) 1000  
 5) 512

**Directions (146 – 150):** In each question below is given a group of letters followed by four combinations of digits / symbols numbered 1, 2, 3 and 4. You have to find out which of the combinations correctly represents the group of letters based on the following coding system and mark the number of that combination as the answer. If none of the four combinations correctly represents the group of letters, mark (5) i.e. "None of these" as the answer.

Letter:	J	H	Q	A	R	L	E	G	T	U	M	B	C	I	P
Digit/:															
Symbol	5	@	2	8	1	9	%	#	©	4	6	\$	★	3	7

**Conditions:**

- i. If both the first and the last letters of the group are vowels, their codes are to be interchanged.
- ii. If the first letter is a consonant and the last letter is a vowel, both are to be coded by the code for the consonant.

146. **JQGALI**  
 1) 32#893                                      2) 52#893                                      3) 52#895                                      4) 32#895  
 5) None of these.
147. **EBHRMT**  
 1) %@\$16©                                      2) %@\$@16©                                      3) 6\$@1©%                                      4) ©@\$@16%  
 5) None of these



148. IGCHRE

- 1) %#★@13  
2) 3#★@1%  
3) 3#★@13  
4) %#★@1%  
5) None of these

149. BQRLHA

- 1) \$219@8  
2) 8219@\$  
3) 8219@8  
4) \$219@\$  
5) None of these

150. QRLGHM

- 1) 219#@2  
2) 619#@6  
3) 619#@2  
4) 619@#2  
5) None of these

**Directions (151 – 155):** In the following questions, the symbols \$, @, ©, % and ★ are used with the following meaning as illustrated below:

'P \$ Q' means 'P is not smaller than Q'

'P @ Q' means 'P is not greater than Q'

'P © Q' means 'P is neither greater than nor smaller than Q'.

'P % Q' means 'P is neither smaller than nor equal to Q'

'P ★ Q' means 'P is neither greater than nor equal to Q'.

Now in each of the following questions assuming the given statements to be true, find which of the two conclusions I and II are given below them is/ are definitely true?

Give answer 1 if only Conclusion I is true.

Give answer 2 if only Conclusion II is true.

Give answer 3 if either Conclusion I or II is true.

Give answer 4 if neither Conclusion I nor II is true.

Give answer 5 if both Conclusions I and II are true.

151. **Statements:** K @ B, B ★ J, J © T

**Conclusions:** I. K ★ T II. B @ T

152. **Statements:** F \$ M, M @ L, L ★ W

**Conclusions:** I. W \$ M II. F @ L

153. **Statements:** R ★ Q, Q @ F, F % A

**Conclusions:** I. R \$ A II. F @ L

154. **Statements:** V \$ X, X © Y, Y % H

**Conclusions:** I. Y @ V II. H ★ V

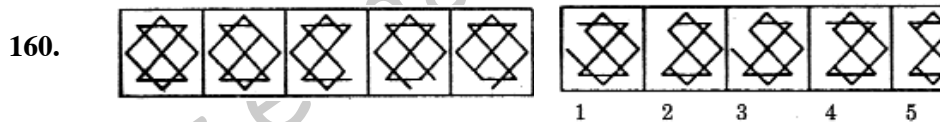
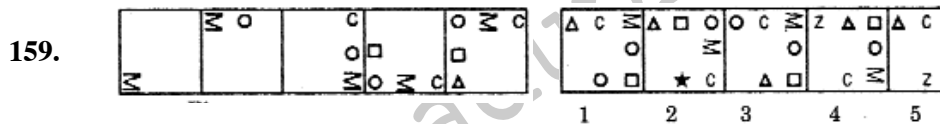
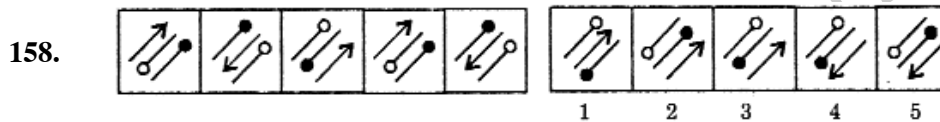
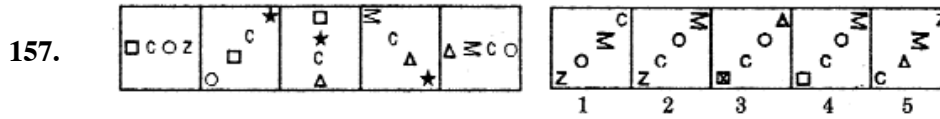
155. **Statements:** M @ B, B ★ A, A @ F

**Conclusions:** I. M ★ A II. B ★ F

Directions (156 – 160): In each of the questions given below which one of the five answer figures on the right should come after the problem figures on the left, if the sequence were continued?

Problem Figures

Answer figures



**MARKETING/ COMPUTERS KNOWLEDGE**

161. Bank marketing means.

- 1) Selling of banks
- 2) Buying of banks
- 3) Merger of banks
- 4) Selling bank's products and services
- 5) Selling various items in banks

162. Proper pricing is needed for

- 1) Extra charges for extra services
- 2) Levy of VAT
- 3) Good customer service
- 4) Putting burden on the customer
- 5) Service with extra facilities

163. A lead means

- 1) A Bank's marketing staff
- 2) A Religious leader
- 3) Bank's chairman
- 4) Target customer
- 5) Leash tied to a dog

164. A good salesman should be

- 1) Aggressive
- 2) Pushy
- 3) Fierce
- 4) Polite, but firm
- 5) Talkative

- 165.** Relationship Selling means
- 1) Preparing a list of relatives
  - 2) Cross – selling
  - 3) Selling to relatives
  - 4) Selling to strangers
  - 5) Telemarketing
- 166.** Find the incorrect statement.
- 1) Marketing has no relevance in Public Sector Banks.
  - 2) Marketing has no relevance in Private Sector Banks.
  - 3) Marketing has no relevance in Foreign Banks.
  - 4) All of these.
  - 5) None of these.
- 167.** Marketing is not required in one of the following products. That is
- 1) Sale of Credit/ Debit Cards.
  - 2) Sale of Net Banking
  - 3) Sale of Corporate Loans.
  - 4) Sale of Retail Loans.
  - 5) None of these.
- 168.** HNI means.
- 1) Highly Negative Individual
  - 2) High Networth Individual
  - 3) High Neutral Individual
  - 4) Highly Necessary Individual
  - 5) All of these
- 169.** Digital Banking means
- 1) Banking with calculators.
  - 2) Banking with digital instruments.
  - 3) Internet Banking and Telebanking
  - 4) Export finance
  - 5) None of these
- 170.** Home Loans are granted to
- 1) Individuals
  - 2) Institutions
  - 3) Builders
  - 4) All of these
  - 5) None of these
- 171.** Credit cards are used for
- 1) Cash withdrawals.
  - 2) Purchase of air tickets.
  - 3) Purchase of consumable items from retail outlets.
  - 4) All of these.
  - 5) None of these.
- 172.** The ATMs are
- 1) Branches of banks
  - 2) Manned counters of banks
  - 3) Unmanned, cash dispensers
  - 4) All of these
  - 5) None of these

173. Internet Banking means
- 1) Meeting of Banks on the Net
  - 2) Net Practice
  - 3) Banking transactions through internet
  - 4) Transactions with foreign countries
  - 5) All of these
174. Customer Loyalty means
- 1) Shifting of customers from one bank to another
  - 2) Customers banking with one bank exclusively
  - 3) Customers returning lost items
  - 4) Customer giving gifts to banks
  5. None of these
175. A Marketing Plan is necessary for
- 1) Having a focussed approach to marketing
  - 2) To decide marketing strategies
  - 3) To decide product strategy
  - 4) To decide advertising strategy
  - 5) All of these
176. Public Relations is required for
- 1) Improving customer service in the company
  - 2) Improving marketing functions in the company
  - 3) Better atmosphere in the company
  - 4) All of these
  - 5) None of these
177. One of the following qualities is not required for effective marketing. That is
- 1) Self-motivation
  - 2) Effective communication skills
  - 3) Team work
  - 4) Perseverance
  - 5) Sympathy
178. Gift of the gab means
- 1) Distribution gifts
  - 2) Collecting garbage
  - 3) Multi-linguist
  - 4) Good communication skills
  - 5) Short-tempered
179. Rural Marketing involves
- 1) Selling to farmers and agriculturists
  - 2) Selling to rural households
  - 3) Selling to rural industries
  - 4) Arranging melas
  - 5) All of these

180. Find the incorrect statement
- 1) Marketing is redundant in computerised banks
  - 2) Marketing is redundant in foreign countries
  - 3) Marketing is redundant in private establishments
  - 4) Marketing is redundant in Government establishments
  - 5) All of these
181. What menu is selected to cut, copy, and paste?
- 1) File
  - 2) Tools
  - 3) Special
  - 4) Edit
  - 5) None of these
182. The most important or powerful computer in a typical network is
- 1) desktop
  - 2) network client
  - 3) network server
  - 4) network station
  - 5) None of these
183. The primary purpose of software is to turn data into
- 1) Web sites
  - 2) information
  - 3) programs
  - 4) objects
  - 5) None of these
184. The ability to find an individual item in a file immediately ..... is used.
- 1) file allocation table
  - 2) directory
  - 3) sequential access
  - 4) direct access
  - 5) None of these
185. To make a notebook act as a desktop model, the notebook can be connected to a ..... which is connected to a monitor and other devices.
- 1) bay
  - 2) docking station
  - 3) port
  - 4) network
  - 5) None of these
186. You can use the tab key to
- 1) move a cursor across the screen
  - 2) indent a paragraph
  - 3) move the cursor down the screen
  - 4) Only 1 and 2
  - 5) None of these
187. A collection of related files is called a
- 1) character
  - 2) field
  - 3) database
  - 4) record
  - 5) None of these
188. Storage that retains its data after the power is turned off is referred to as
- 1) Volatile storage
  - 2) non-volatile storage
  - 3) sequential storage
  - 4) direct storage
  - 5) None of these
189. Which of the following is an example of connectivity?
- 1) Internet
  - 2) floppy disk
  - 3) power cord
  - 4) data
  - 5) None of these

190. ....is the process of finding errors in software code.
- 1) Compiling                      2) Testing                      3) Running                      4) Debugging
- 5) None of these
191. A ..... contains specific rules and words that express the logical steps of an algorithm.
- 1) syntax    2) programming structure
- 3) programming language                      4) logic chart
- 5) None of these
192. Changing an existing document is called .....the document.
- 1) creating                      2) editing                      3) modifying                      4) adjusting
- 5) None of these
193. Virtual memory is
- 1) memory on the hard disk that the CPU uses as an extended RAM
- 2) in RAM
- 3) only necessary if you do not have any RAM in your computer
- 4) a back up device for floppy disks
- 5) none of these
194. Computers use the .....number system to store data and perform calculations.
- 1) decimal                      2) hexadecimal                      3) octal                      4) binary
- 5) none of these
195. The ..... key will launch the start buttons.
- 1) esc                      2) shift                      3) windows                      4) shortcut
- 5) None of these
196. To move to the beginning of a line of text, press the ..... key.
- 1) home                      2) a                      3) page up                      4) enter
- 5) None of these
197. When sending an e-mail, the .....line describes the contents of the message.
- 1) to                      2) subject                      3) contents                      4) CC
- 5) None of these
198. Which groupings do you work with when formatting text in Word?
- 1) Tables, paragraphs and indexes
- 2) Paragraphs, indexes and sections
- 3) Characters, sections and paragraphs
- 4) Indexes, characters and tables
- 5) None of these
199. Which of the following is the largest unit of storage?
- 1) GB                      2) KB                      3) MB                      4) TB
- 5) None of these

200. The ..... tells the computer how to use its components.

- |                     |                        |
|---------------------|------------------------|
| 1) utility          | 2) network             |
| 3) operating system | 4) application program |
| 5) None of these    |                        |

### ANSWERS

1-1; 2-5; 3-2; 4-3; 5-4; 6-4; 7-2; 8-2; 9-1; 10-2; 11-5; 12-5; 13-5; 14-2; 15-4; 16-5; 17-3; 18-2; 19-3; 20-4; 21-1; 22-2; 23-5; 24-3; 25-4; 26-2; 27-4; 28-3; 29-1; 30-4; 31-1; 32-5; 33-1; 34-3; 35-5; 36-3; 37-1; 38-5; 39-2; 40-3; 41-3; 42-2; 43-4; 44-4; 45-1; 46-1; 47-2; 48-5; 49-1; 50-5; 51-1; 52-2; 53-4; 54-3; 55-5; 56-3; 57-2; 58-5; 59-4; 60-1; 61-3; 62-5; 63-1; 64-2; 65-4; 66-3; 67-1; 68-2; 69-4; 70-5; 71-5; 72-2; 73-3; 74-1; 75-4; 76-3; 77-5; 78-2; 79-1; 80-4; 81-5; 82-3; 83-5; 84-2; 85-5; 86-1; 87-4; 88-4; 89-1; 90-2; 91-1; 92-4; 93-2; 94-3; 95-4; 96-1; 97-5; 98-3; 99-2; 100-3; 101-5; 102-3; 103-4; 104-2; 105-1; 106-1; 107-2; 108-2; 109-3; 110-5; 111-1; 112-4; 113-2; 114-5; 115-4; 116-5; 117-3; 118-4; 119-1; 120-5; 121-3; 122-2; 123-1; 124-3; 125-5; 126-5; 127-2; 128-2; 129-4; 130-1; 131-5; 132-1; 133-3; 134-4; 135-2; 136-1; 137-3; 138-5; 139-3; 140-4; 141-5; 142-1; 143-3; 144-4; 145-1; 146-3; 147-2; 148-1; 149-4; 150-5; 151-1; 152-4; 153-2; 154-5; 155-5; 156-2; 157-5; 158-3; 159-3; 160-1; 161-4; 162-3; 163-4; 164-4; 165-3; 166-4; 167-5; 168-2; 169-3; 170-1; 171-4; 172-3; 173-3; 174-2; 175-5; 176-4; 177-5; 178-4; 179-5; 180-5; 181-4; 182-3; 183-2; 184-3; 185-2; 186-4; 187-4; 188-2; 189-1; 190-2; 191-1; 192-2; 193-1; 194-4; 195-3; 196-1; 197-2; 198-1; 199-1; 200-3.